

**1:3 Surface Water p.19-27**

Write all the Blue and Red Headings.

1. Surface Water

2. \_\_\_\_\_

3. \_\_\_\_\_

4. \_\_\_\_\_

5. \_\_\_\_\_

6. \_\_\_\_\_

7. \_\_\_\_\_

8. \_\_\_\_\_

9. \_\_\_\_\_

10. \_\_\_\_\_

11. \_\_\_\_\_

12. \_\_\_\_\_

13. \_\_\_\_\_

Define all the vocabulary words.

1. \_\_\_\_\_


2. \_\_\_\_\_

3. \_\_\_\_\_

4. \_\_\_\_\_

5. \_\_\_\_\_

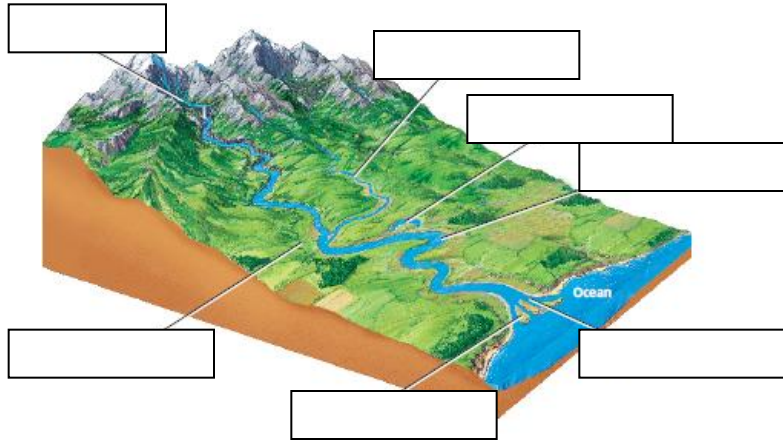
6. \_\_\_\_\_

Fold along this line 

Glue this side of the page  
into your ISN on page \_\_\_\_\_  
using 6 small dots of glue.

1. What is a river system?

2. Label the diagram below.




3. What are watersheds?

4. Name the watershed closest to us.


5. How do ponds and lakes get their water?

6. Draw and label some things you might find in a pond or lake.



7. How are lakes formed?

8. Draw and describe how a lake changes over a long time.



9. What did you learn while reading the section?

10. What questions do you still have?